



**SALWAN PUBLIC SCHOOL**  
**Sector-15 (II)**  
**Gurugram**



***Holiday Homework***

**SERVICE BEFORE SELF**

**2019-20**

**Class –III**

Dear Parent,

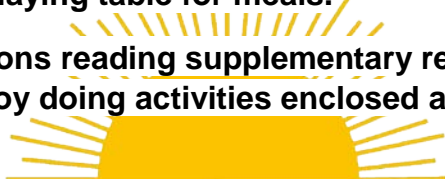
Season's Greetings!

Holidays are welcomed by all as they give a short break from routine life and help recoup health and viability. We have announced our Summer Vacation from May 13, 2018; this definitely comes along with the 'Holiday Homework'!

Our Holiday Homework has been carefully planned to target the various interests and learning styles of our students. Based on Gardener's theory of Multiple Intelligence, the activities will not only appeal students but also engage them in learning effectively.

Here is what the students need to do:

- **Wake up early and practice Yoga/Simple exercises.**
- **Read newspaper every morning.**
- **Drink lots of water and avoid aerated drinks.**
- **Try drinking lemonade, jaljeera, aampanna and coconut water this season.**
- **Consume vegetables and fruits that have good water content.**
- **Help your parents keeping the house clean, filling water bottles to be kept in refrigerator and laying table for meals.**
- **Utilise lazy afternoons reading supplementary reader 'Gulliver's Travel' (Chapters 1-5); enjoy doing activities enclosed and submit them on the day of rejoining.**
- **To enhance your mental agility, do the Mathematics assignment sheets enclosed.**
- **Make a folder by using waste material and submit all your homework in the folder.**



**Given below are a few suggested sites for children's book, for your reference.**

- <http://www.magickeys.com/books/>
- <https://www.storyjumper.com/book/search>
- [www.yesterdaysclassics.com/previews/baldwin\\_fifty\\_preview.pdf](http://www.yesterdaysclassics.com/previews/baldwin_fifty_preview.pdf)
- <https://www.tell-a-tale.com/10-short-panchatantra-stories-must-read-4-6-year-old-kids/>

We are looking forward to children coming back to school after rejuvenating holidays on **1<sup>st</sup> July 2019**, with smiling faces and joy in their hearts.

We wish you abundance, happiness, peace and a session filled with hope. All of us at SPS, Gurgaon wish you the best of holidays.

Regards

Team SPS

## **Activity 1 (Logical Intelligence) Vocabulary Flip Book**

Learning new words can help children develop a curiosity about language, as well as a lifelong love of learning. So this activity deals with making of words fun by creating a word flip book as you read.

- Pick up your book 'Gulliver's Travels' and do word search.
- Point out ten unfamiliar words as you read the book.
- Write down each word on an index card and continue reading till you find ten words.
- Also write the meaning of the selected words.
- Decorate the cards the way you wish.
- Make a small hole in one corner of the card, and slip the cards onto the string.
- Enjoy your new vocabulary flip book and the new words that you have learnt.

## **Activity 2 (Linguistic Intelligence)**

**Pick up any five characters from the book 'Gulliver's Travels' and write one sentence about each.**

1. \_\_\_\_\_

2. \_\_\_\_\_



3. \_\_\_\_\_

\_\_\_\_\_

4. \_\_\_\_\_

\_\_\_\_\_

5. \_\_\_\_\_

\_\_\_\_\_

**Activity 3 (Interpersonal Intelligence)**  
**Personal Tall Tales**

Imagine yourself as Gulliver from the story 'Gulliver's Travels' and write a small paragraph expressing your feelings after seeing the tiny people of the strange island.

---

---

---

---

---


---

---

---

---

---



*SERVICE BEFORE SELF*  
**Activity 4 (Naturalistic Intelligence)**

If you would have been trapped on an unknown land as Gulliver, mention any two difficulties that you would have faced in relation to your food habits.

---

---

---

---

---


---

---

---

**Activity 5 (Visual Spatial Intelligence)**  
**Artful artists**

Children love to be creative when it comes to drawing, and illustrations add visual imagery to stories. Illustrate the part of the story you liked the best or describe your favourite character. Also write a few sentences that tell about this picture.



## गतिविधि - 6

- 1) सुलेख के 20 पेज करें । ( व्याकरण कॉपी में करें )
- 2) अपने परिवार के सदस्यों के साथ बगीचे में जाएँ और वहाँ भ्रमण करते हुए प्रकृत की कौन-कौन सी चीजें आपने देखी । उन चीजों की सूची व चित्र बनाएँ ।
- 3) पंचतंत्र की निम्नलिखित पाँच कहानियाँ पढ़ें । किसी एक कहानी का प्रवाह संचित्र (Flow Chart) बनाएँ ।

### कहानियों के नाम:-

- 1) कछुआ और खरगोश
- 2) मूर्ख बातुनी कछुआ
- 3) दुष्ट सर्प और कौवे
- 4) चूहे की शादी
- 5) चतुर खरगोश और शेर

कहानी पढ़ने के बाद किसी एक कहानी पर नीचे दिये गए मुख्य बिन्दुओं पर आधारित प्रवाह संचित्र (FLOW CHART) बनाए

- सम्पूर्ण कार्य A - 4 Sheet पर रंगों का सुंदर प्रयोग करते हुए आकर्षक रूप में करे

### आवश्यक निर्देश

कहानी व लेखक का नाम

कहानी में आए 15 नवीन शब्द छाँटिए।

नवीन शब्द में से किन्हीं 10 शब्दों को वाक्य में प्रयोग कीजिए को वाक्य में प्रयोग करें।

मुख्य पात्र - कहानी के मुख्य पात्र कौन-कौन से हैं ? उन सभी का नाम लिखिए ।

चारित्रिक विशेषताएँ - सभी पात्रों की चरित्र (Character) संबंधी विशेषताएँ लिखें ।

प्रिय संवाद – कहानी में आपको किस-किस पात्र का कौन –सा संवाद (dialogue) अच्छा लगा, उन्हें लिखिए | प्रिय संवाद तीन या चार से अधिक भी हो सकते हैं |



कहानी का सारांश अपने शब्दों में लिखिए



प्रिय पात्र – कहानी में आपका प्रिय पात्र कौन-सा है और क्यों ?



कहानी का आवरण पत्र (Cover page) तैयार करें



शिक्षा- कहानी से आपको क्या शिक्षा मिली ?

### **Activity 7**


- Collect leaves and flowers of different types. Do not pluck from plants or trees. Pick only fallen ones. Press them in the folds of old newspapers. Put something heavy like a book over them. The leaves and flowers will become dry in a few days. Use them to make a pretty cover for keeping your homework.
- Make three pictures of different animals using dry leaves on A4 size sheet. Also write the names of the leaves used and name of the animal.
- Make an outline of any 3 different insects on A4 sheet. Take eggshells or any waste material and color them. Paste those colored eggshells in the outline.
- Jigsaw puzzle- Paste a picture of any endangered animal on a piece of cardboard. Cut along the edges of the picture. Cut the cardboard into unequal pieces. Juggle the pieces and arrange them





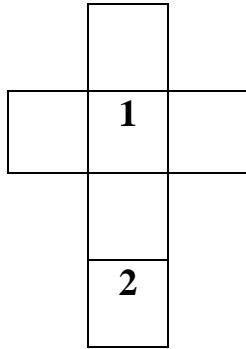
## Practice Sheet – 1

### Q1. Fill in the blanks.

- a. Expand 789. \_\_\_\_\_
- b. 1000 more than 45 is \_\_\_\_\_
- c. Half of 50 is \_\_\_\_\_
- d. Roman numeral for 48 is \_\_\_\_\_
- e. The sum of first 5 even numbers is \_\_\_\_\_
- f. There are \_\_\_\_\_ 10's in 130.
- g. The numeral for 9 hundreds + 5 thousands + 8 ones is \_\_\_\_\_
- h.  $1500 + 116$  \_\_\_\_\_  $1600 + 0$  ( fill  $>$ ,  $<$ ,  $=$  )
- i. Manav is 45 years old. His sister Shivani is 6 years younger than him. What is Shivani's age?  SERVICE BEFORE SELF
- j. One hundred fifty \_\_\_\_\_ 215 ( Put  $<$ ,  $>$ ,  $=$  )
- k. The short form for  $100 + 80 + 4$  is \_\_\_\_\_.
- l.  $100 + 1500 =$  \_\_\_\_\_
- m. 2 hundreds + 1 tens = \_\_\_\_\_
- n. 50 less than 355 is \_\_\_\_\_
- o. Add half of 100 to 5 tens \_\_\_\_\_

## Logical Reasoning Practice Sheet 2

**Q1. Write the numbers 3, 4, 5 and 6 in the correct place so that each cross of the line adds upto 11.**



**Q2. Write the numbers to complete the following table:**

In	18	17	16	15	10	9
Out	15	14	13			

i. 10, 8, 6

ii. 4, 6, 8

iii. 12, 7, 6

**Q3. The product of 100 x 10 is equal to the sum of :**

i.  $600 + 350$

ii.  $650 + 350$

iii.  $750 + 350$



**Q4. Find the next letter in the series HP IR JT KV LX**

i. MY

ii. MZ

iii. YL

**Q5. What comes after 8 tens and 8 ones?**

i. 81

ii. 82

iii. 89

**Q6. Some letters in the word CANDLE are written using straight lines and curved lines. How many letters are written using only straight lines?**

i. 2

ii. 4

iii. 5

**Q7. Choose the incorrect statement**

- i.  $117 + 28 < 116 + 10$     ii.  $123 + 10 = 150 - 17$     iii.  $61 + 5 = 55 + 11$

**Q8. Solve the following steps and select the correct option.**

Step I: Consider the greatest one digit odd number.

Step II: Multiply the number by 5.

Step III: Add 2 in it.

- i. The result is odd    ii. The result is even    iii. Successor of the result is odd

**Q9. If in a certain language, UTENSIL is coded as WVGPUKN, which word would be coded as DMSFXG?**



i. BKQEVE

ii. BKQDVE

iii. BKQDWE

**Q10. If 'black' is called 'pink', 'pink' is called 'blue', 'blue' is called 'brown', 'brown' is called 'orange', 'orange' is called 'violet', 'violet' is called 'red' and 'red' is called 'black', what is the colour of blood?**

i. Black

ii. brown

iii. red

Puzzle

Practice Sheet 3

**Q1. Find the answer to this riddle by using place value! Take a look at each number below. One digit in each number is underlined. Circle the letter in each line that tells the place value of the underlined number. Write the letters next to each correct answer in the blanks below. The first one is done for you.**

A.      1 5 2 0 9      (a) thousands      i    hundreds

B.      4 7 2 9      n    hundreds      s    tens

C.      4 2 5      e    hundreds      o    tens

D.      7 6 1 8      c    tens      g    ones

E.      1 1 1 2      p    thousands      r    hundreds

F.      9 6 3 6      a    hundreds      e    ones

G.      2 2 2      t    tens      m    ones



**a**  
\_\_\_\_\_

**A**      **B**      **C**      **D**      **E**      **F**      **G**

**Q2. Use even numbers from 2 to 18 to get the magic square 30.**


## Practice Sheet 4

**Q1. Add 5 thousands and 65 tens**

---



---



---



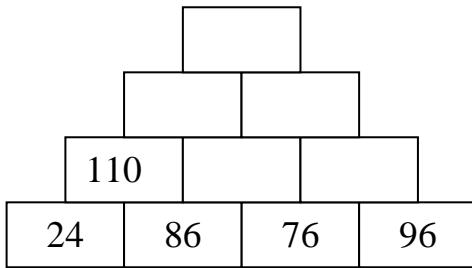
---



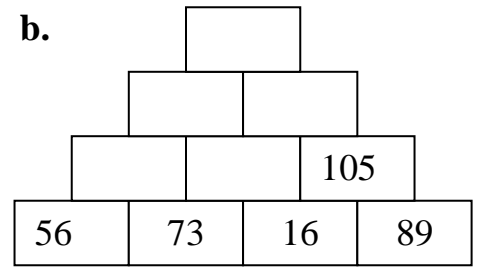
---

**Q2. Complete the addition tower.**

a.



b.



**Q3. Complete the table.**

Roman Numeral	Hindu Arabic Numeral	Roman Numeral	Hindu Arabic Numeral
IX		XVI	
	32	XXIV	
XL			26
	18	XXXVII	

**Q4. Find the predecessor and successor of the current year.**

Ans \_\_\_\_\_

**Q5. Round off the given numbers on number line.**

356 to nearest 100	2896 to nearest 1000
--------------------	----------------------

## Practice Sheet 5

**Q1. Fill in the correct symbol >, < or = in the space given below.**

a. 1001 \_\_\_\_\_ 1010

b. 8231 \_\_\_\_\_ 9231

c. 24 tens \_\_\_\_\_ 10 tens

d. 6136 \_\_\_\_\_ 4136

e. XXIV \_\_\_\_\_ XXXIV

f. VI \_\_\_\_\_ IV

**Q2. I bought VI apples, VIII bananas and XI oranges. How many fruits did I buy in all? \_\_\_\_\_ (write the answer in Roman Numerals)**

**Q3. Write the missing numbers.**

a.  $7206 = 7000 + \underline{\hspace{2cm}} + 00 + 6$

b.  $8754 = 8000 + \underline{\hspace{2cm}}50 + 4$

c.  $3332 = \underline{\hspace{2cm}} + 300 + \underline{\hspace{2cm}} + 2$

d.  $4955 = \underline{\hspace{2cm}} + 900 + 50 + 5$

**Q4. Make the greatest and smallest 4 –digit number using the digits 5, 1, 0, 8 and also find their sum.**

Greatest number formed =

Smallest number formed =

Sum =

## GENERAL AWARENESS

**Fill in the given blanks.**

1. Leaning Tower of Pisa is in \_\_\_\_\_.
2. One who makes pictures for books is called \_\_\_\_\_.
3. One who designs the pages of a book is called \_\_\_\_\_.
4. The nomads of China live in circular tents called \_\_\_\_\_.
5. The \_\_\_\_\_ live in tents called teepees.
6. \_\_\_\_\_ is the hottest planet in our solar system.
7. \_\_\_\_\_ takes 29.5 years to make one complete orbit of the Sun.
8. Mars is nicknamed as red planet because it is covered with \_\_\_\_\_.
9. \_\_\_\_\_ is the largest creature on the Earth.
10. \_\_\_\_\_ is the symbol of the World Wildlife Fund.
11. The yellow part of an egg is called \_\_\_\_\_.
12. The instrument that measures the body temperature is called \_\_\_\_\_.
13. ATM stands for \_\_\_\_\_.
14. \_\_\_\_\_ is the Norse god of thunder and lightning who wields enchanted hammer called Mjolnir.
15. The fourteenth Prime Minister of India is \_\_\_\_\_.

